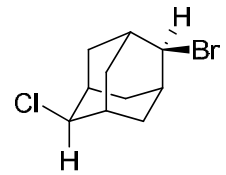
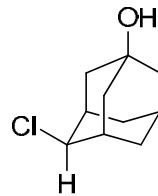
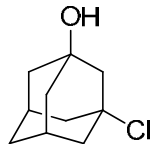
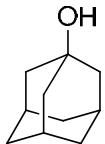
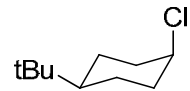
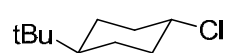
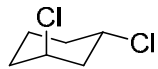
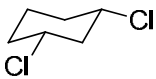
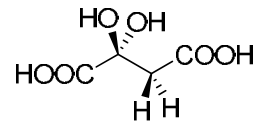
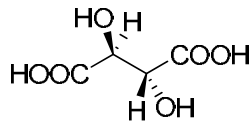
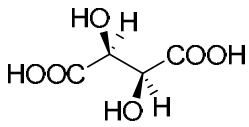
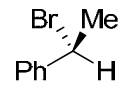
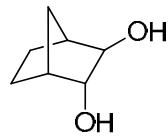
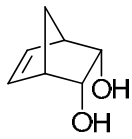
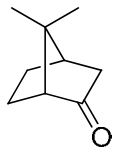


Indicare quale delle seguenti strutture è chirale (fare un cerchio)



Indicare le relazioni di topicità fra gli atomi di idrogeno delle seguenti molecole. Indicare le unità stereogeniche (cerchio) e prostereogeniche (quadrato).

